

# Tallene 0-20

## Hæfte 1

0 - 20

Navn: \_\_\_\_\_

Klasse: \_\_\_\_\_

# Tallene 0-20. Hæfte 1

Tæl og skriv antallet i cirklen

A red-bordered box containing 15 light blue teddy bears arranged in three rows: the first two rows have 6 bears each, and the third row has 4 bears. To the right is a red circle for writing the count.

A pink-bordered box containing 9 watermelon slices arranged in three rows: the first two rows have 3 slices each, and the third row has 3 slices. To the right is a pink circle for writing the count.

A green-bordered box containing 13 ice cream cones with pink and white stripes and blue sticks, arranged in two rows: the first row has 8 cones and the second row has 5 cones. To the right is a green circle for writing the count.

A yellow-bordered box containing 11 green pears arranged in three rows: the first row has 4 pears, the second row has 4 pears, and the third row has 3 pears. To the right is a yellow circle for writing the count.

A blue-bordered box containing 10 red apples with green leaves, arranged in three rows: the first two rows have 3 apples each, and the third row has 4 apples. To the right is a blue circle for writing the count.

A purple-bordered box containing 15 yellow stars arranged in three rows: the first two rows have 5 stars each, and the third row has 5 stars. To the right is a purple circle for writing the count.

A red-bordered box containing 17 green trees arranged in three rows: the first row has 7 trees, the second row has 5 trees, and the third row has 5 trees. To the right is a red circle for writing the count.

A green-bordered box containing 18 red ladybugs with white spots, arranged in four rows: the first three rows have 6 ladybugs each, and the fourth row has 5 ladybugs. To the right is a green circle for writing the count.

# Tallene 0-20. Hæfte 1

Sæt streg mellem tal og navn

1

•

• Ni

4

•

• Tre

8

•

• Seks

5

•

• En

6

•

• To

7

•

• Fem

2

•

• Syv

3

•




• Otte

9

•

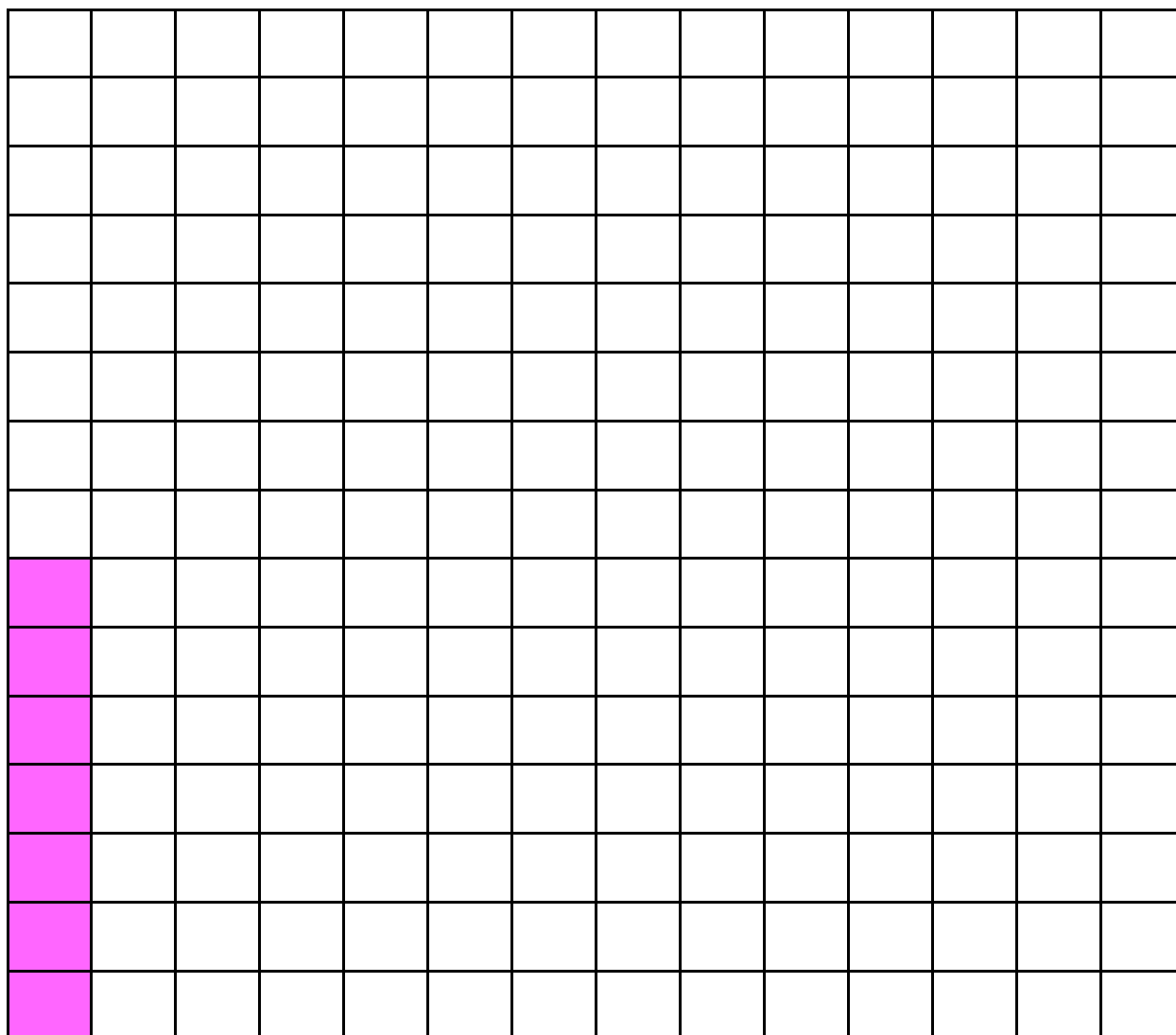
• Fire

Skriv pæne nuller. Start ved pilen.




# Tallene 0-20. Hæfte 1

Farv antallet



7 13 11 4 8 0 12 15 6 9 10 5 14 2

Skriv pæne 1-taller. Start ved pilen.




# Tallene 0-20. Hæfte 1


Skriv hvor mange prikker mariehønsene har.



Antal prikker



Antal prikker



Antal prikker

Skriv pæne 2-taller. Start ved pilen.

2 2 2 2

2 2

2

Læg 2 til


4	+2		+2		+2	
9	+2		+2		+2	
14	+2		+2		+2	

# Tallene 0-20. Hæfte 1

Sæt streg mellem de tal der lagt sammen giver 10



Skriv pæne 3-taller. Start ved pilen.



# Tallene 0-20. Hæfte 1

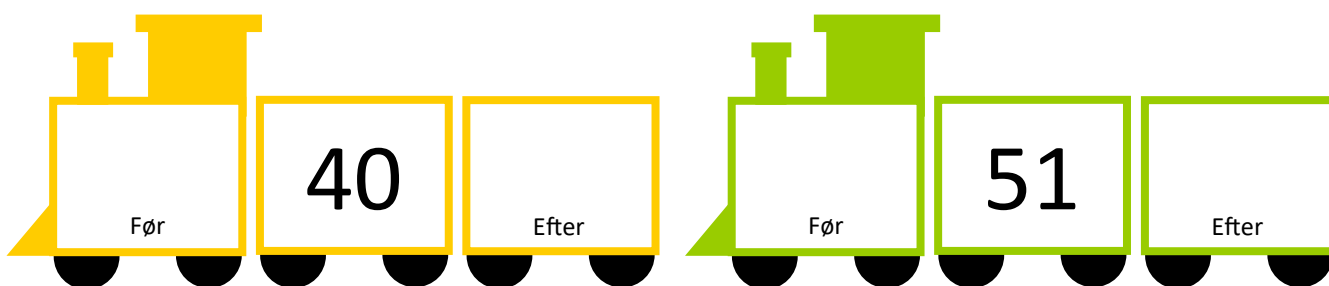
Skriv pæne 4-taller. Start ved pilen.

4 4 4 4

4 4

4

Nabotal



Skriv tallene i rigtig rækkefølge

8 15 3 18 12 7

\_\_\_\_\_

Mindst \_\_\_\_\_ Størst

# Tallene 0-20. Hæfte 1

Skriv pæne 5-taller. Start ved pilen.

Handwriting practice lines for the number 5. Each row consists of a top line, a middle line, and a bottom line. The first row contains four '5's with arrows pointing to the top of each, indicating the starting point for writing. The second row contains two '5's. The third row contains one '5'. The remaining space in each row is blank for practice.

Tæl pengene. Skriv hvor mange 10'ere (10 kr.) og 1'ere (1 kr.) der er.

10'ere	1'ere

10'ere	1'ere

10'ere	1'ere

10'ere	1'ere

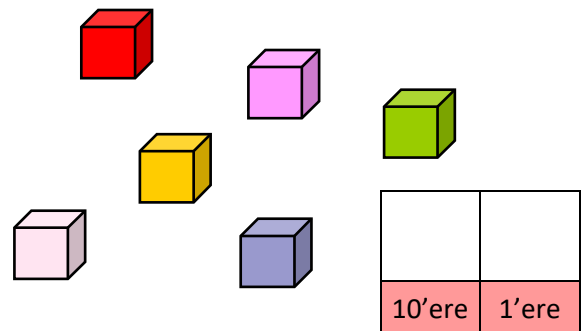
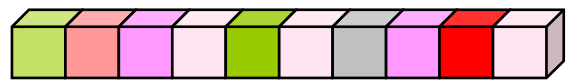
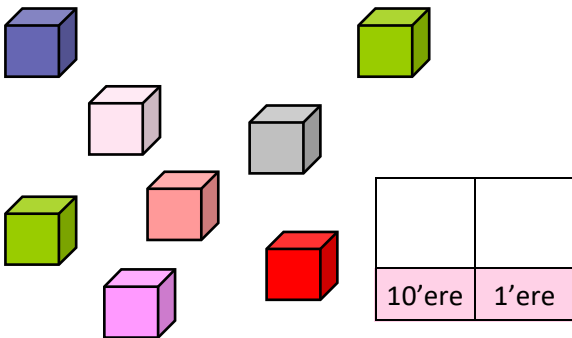
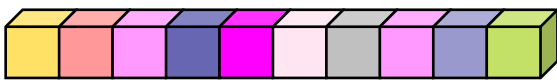


# Tallene 0-20. Hæfte 1

Indsæt de manglende tal

2	3	4				8
		11		13		
	5					10
		13		15		
		7				11

Tæl centicubes. Skriv hvor mange 10'ere stænger og centicubes der er.




Skriv pæne 6-taller. Start ved pilen.

6	6	6	6
6	6		
6			

# Tallene 0-20. Hæfte 1

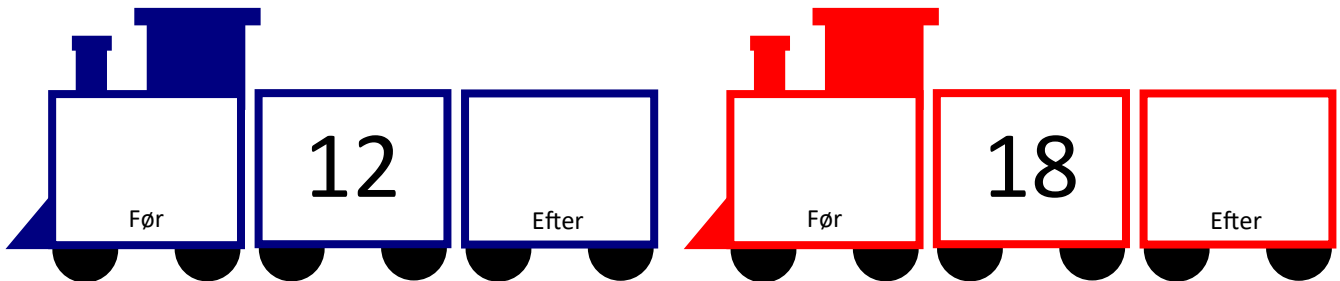
Skriv tallene i rigtig rækkefølge




Mindst

Størst

Nabotal



Skriv pæne 7-taller. Start ved pilen.



# Tallene 0-20. Hæfte 1

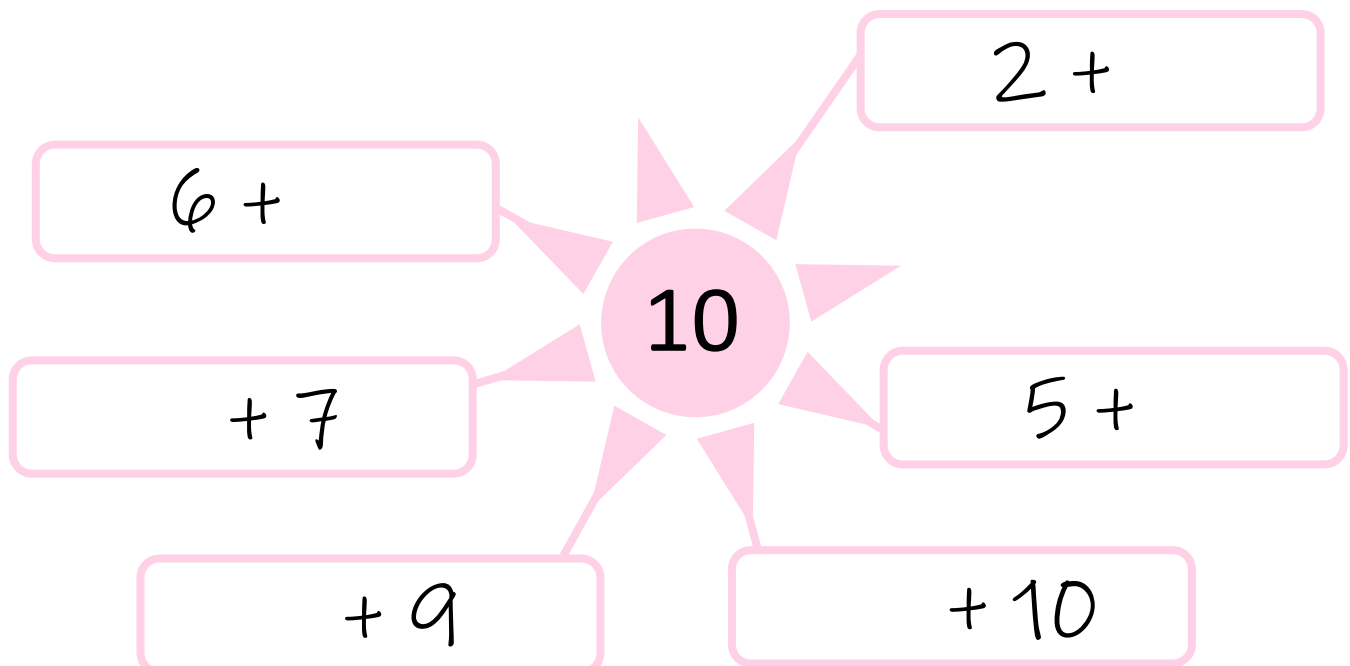
Skriv talrækken færdig



Skriv pæne 8-taller. Start ved pilen.

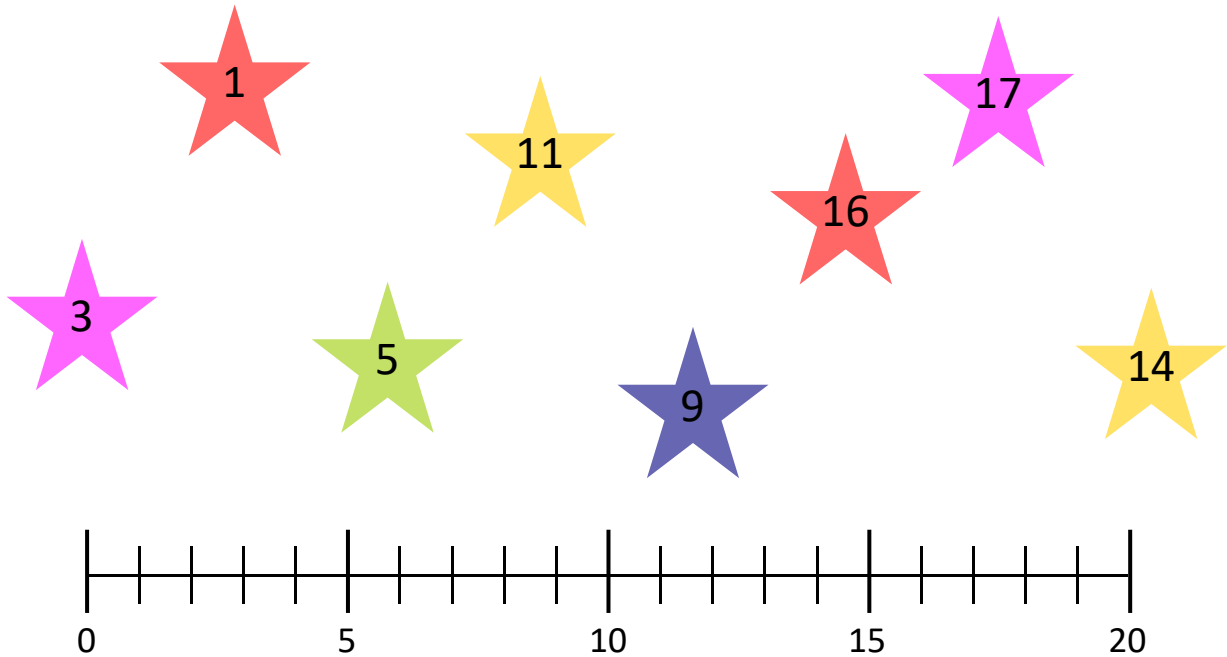
Handwriting practice lines for the number 8. Each line consists of a top line, a middle line, and a bottom line. The first line contains four grey 8s with arrows indicating the starting point and direction of the stroke. The second line contains two grey 8s with arrows. The third line contains one grey 8 with an arrow. The remaining space in each line is blank for practice.

Skriv 10'er vennerne



# Tallene 0-20. Hæfte 1

Sæt streg ned til tallinjen



Skriv hvor mange streger der er.

	<input type="text"/>		<input type="text"/>
	<input type="text"/>		<input type="text"/>
	<input type="text"/>		<input type="text"/>

Skriv pæne 9-taller. Start ved pilen.

9	9	9	9	
9	9			
9				