

Tallene 0-1000

Hæfte 1

991

992

993

994

995

996

997

998


999

Navn: _____

Klasse: _____

Tallene 0-1000. Hæfte 1

Skriv tallene



489

498

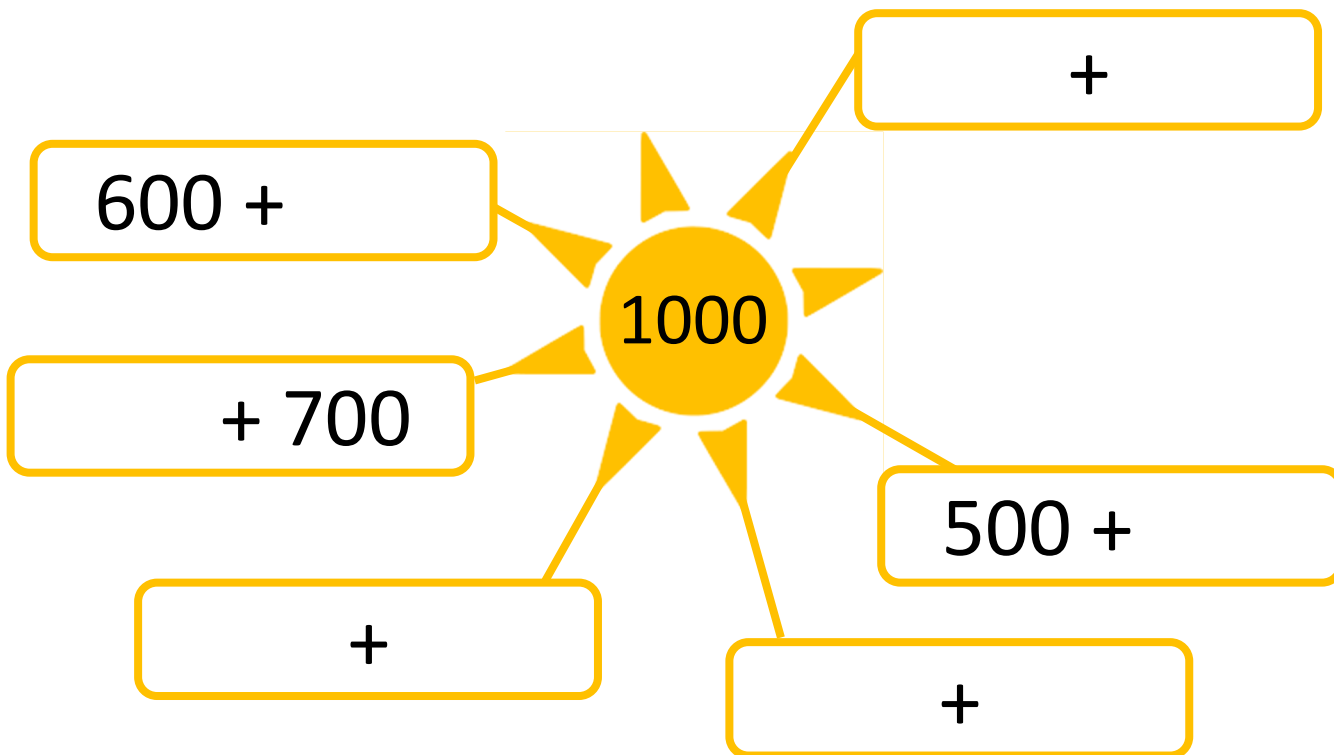
506

513

519

Tallene 0-1000. Hæfte 1

Skriv 1000 venner



100'ere	10'ere	1'ere

100'ere	10'ere	1'ere

100'ere	10'ere	1'ere

100'ere	10'ere	1'ere

Tallene 0-1000. Hæfte 1

Indsæt de manglende tal

421						427
		351		353		
	689					694
		573		575		
		267				271
			996			999

Regn stykkerne

$300 + 8 =$

$200 + 7 =$

$3 + 700 =$

$2 + 600 =$

$100 + 90 =$

$600 + 60 =$

$500 + 40 =$

$800 + 70 =$




$700 + 70 + 2 =$

$40 + 500 + 6 =$

$900 + 70 + 9 =$

$3 + 10 + 500 =$

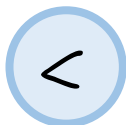
Nabotal



Tallene 0-1000. Hæfte 1


Indsæt >, < eller =

438




569

697




679

493




399

806




608

1452



966

1654



1654

1230



396

1452



1266

Regn stykkerne

$400 + 500 =$

$300 + 200 =$

$900 + 100 =$

$600 + 30 =$

$50 + 300 =$

$400 + 10 =$

$4 + 500 =$

$300 + 70 =$

$600 + 200 =$

$100 + 8 =$

$900 + 200 =$

$800 + 5 =$

Læg 10 til

420

+10

+10

+10

325

+10

+10

+10

631

+10


+10

+10

Tallene 0-1000. Hæfte 1

Indsæt de manglende tal

155		157		159		
302	304	306				
		633	634			637
203		209	212			
	820	830				870



Træk 10 fra

500	-10		-10		-10	
800	-10		-10		-10	
450	-10		-10		-10	

Tallene 0-1000. Hæfte 1

Sæt streg under 1'erne

428 629 49 457 636 1025

Sæt streg under 10'erne

275 636 506 729 45 1147

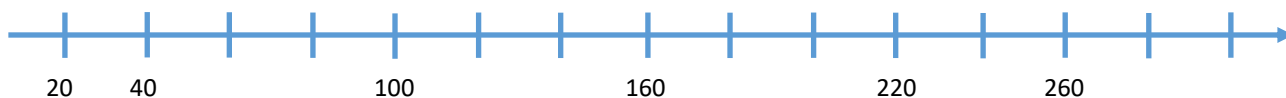
Sæt streg under 100'erne

542 423 760 3055 7353 9261

Sæt streg under 1000'erne

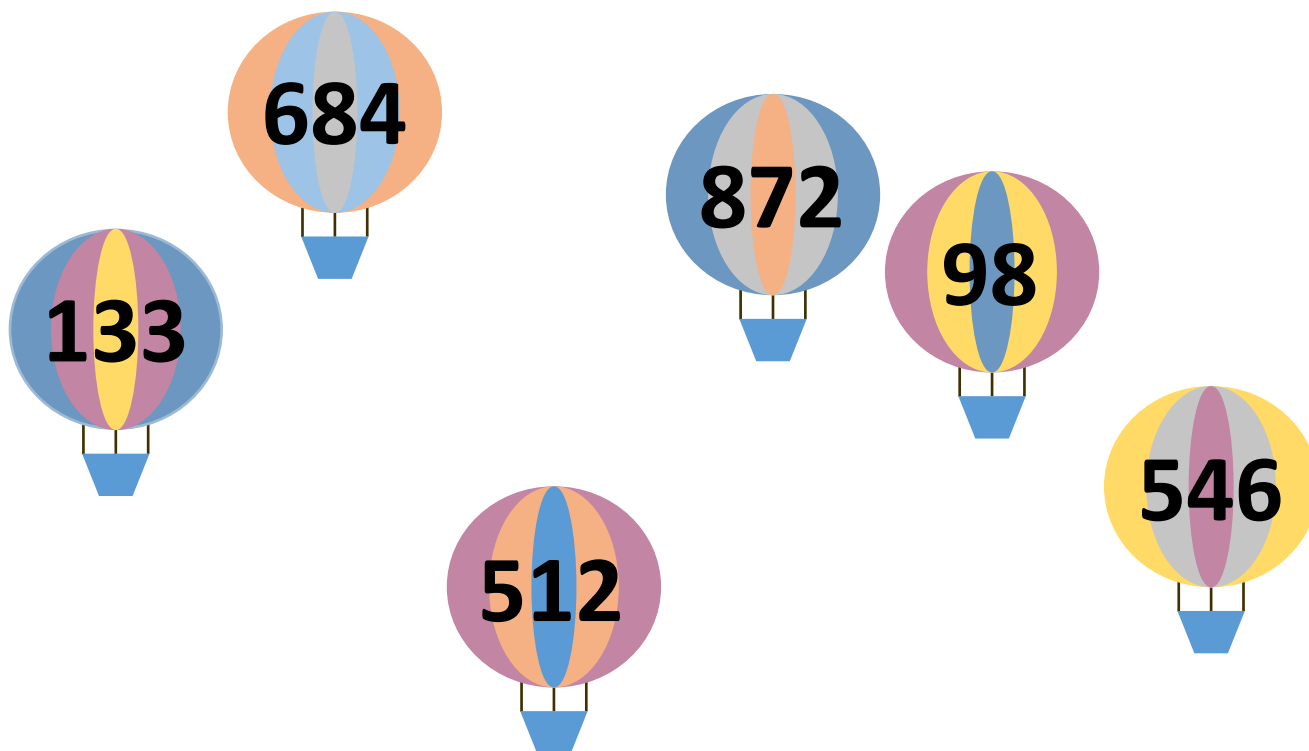
1341 7226 3171 3045 7342 9801

Skriv tal på tallinjerne



Tallene 0-1000. Hæfte 1

Skriv tallene i rigtig rækkefølge



Mindst Størst

Skriv det tal, der kommer før

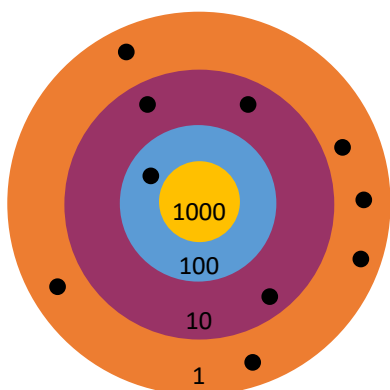
_____ 501	_____ 349	_____ 760	_____ 609
_____ 435	_____ 761	_____ 637	_____ 531
_____ 189	_____ 200	_____ 889	_____ 466

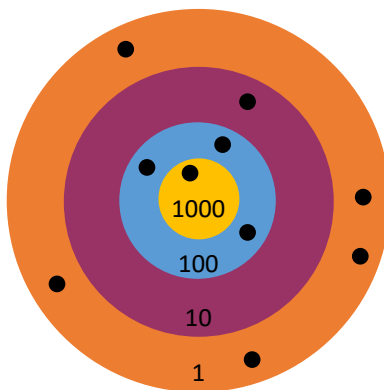
Skriv det tal, der kommer efter

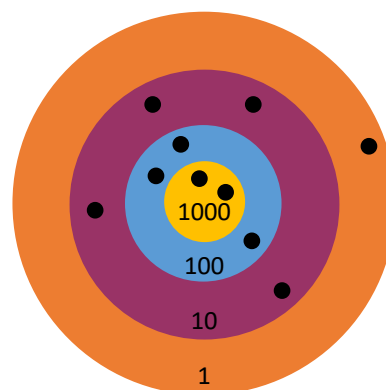
518 _____	461 _____	229 _____	529 _____
264 _____	936 _____	728 _____	299 _____
403 _____	203 _____	419 _____	582 _____

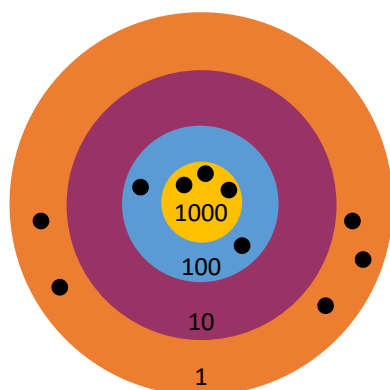
Tallene 0-1000. Hæfte 1

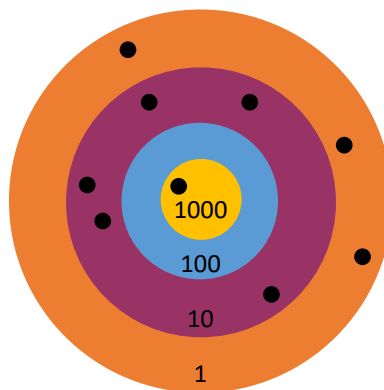
Find antallet af point

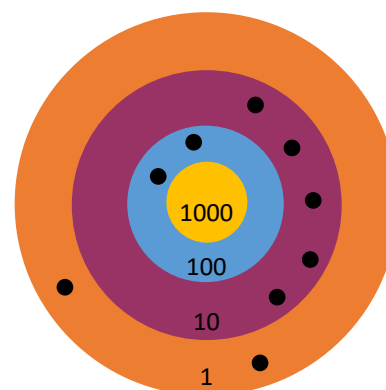




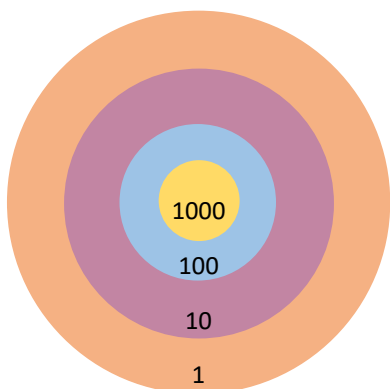




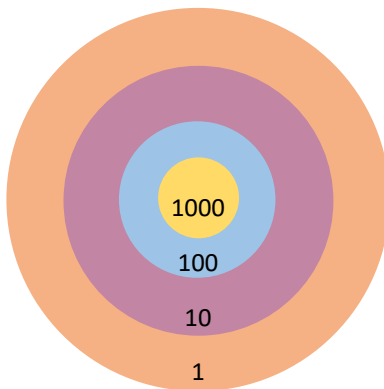




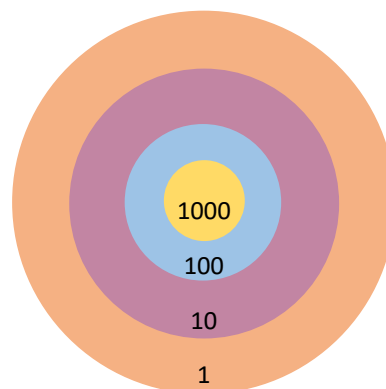
Tegn prikker, så pointene passer



2116



1054



1423

Tallene 0-1000. Hæfte 1

Skriv forskellige tal med tre cifre

3

5

6

5	6	3
---	---	---

--	--	--

5	3	
---	---	--

--	--	--

--	--	--

--	--	--

Skriv tallene i rigtig rækkefølge

Mindst _____ _____ _____ _____ _____ _____ Størst

Skriv forskellige tal med tre cifre

4

8

9

--	--	--

--	--	--

--	--	--

--	--	--

--	--	--


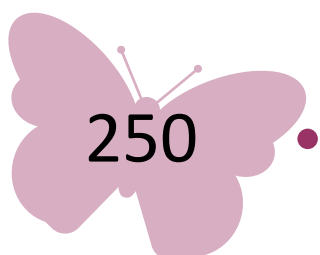

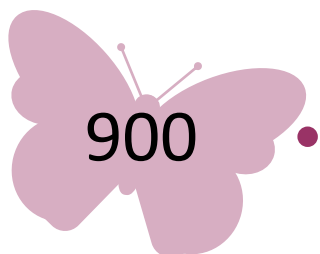


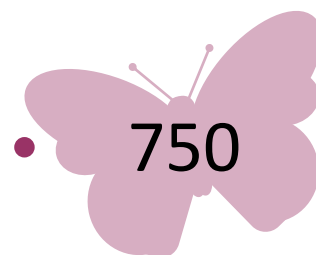
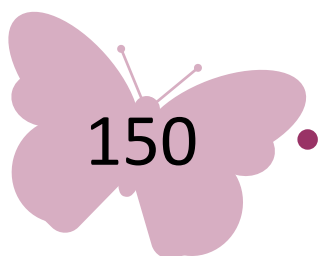
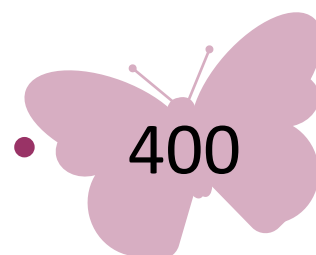
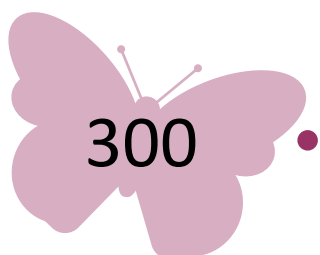
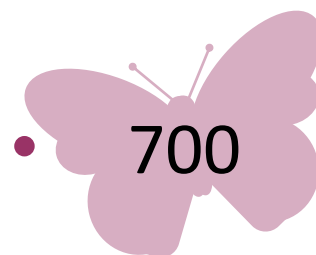
--	--	--

Skriv tallene i rigtig rækkefølge

Mindst _____ _____ _____ _____ _____ _____ Størst

Tallene 0-1000. Hæfte 1

Sæt streg mellem tal der lagt sammen giver 1000



Tallene 0-1000. Hæfte 1

Skriv tallet

____ _
5 en'ere og 6 ti'ere

____ _
7 ti'ere og 4 en'ere

____ _
9 en'ere

____ _
3 en'ere og 8 ti'ere

____ _
5 ti'ere

____ _
3 ti'ere og 1 en'er

____ _
5 en'ere, 3 ti'ere og 7 hundrede

____ _
3 ti'ere, 1 en'er og 6 hundrede

____ _
6 ti'ere, 1 hundrede og 1 en'ere

____ _
2 ti'ere, 5 hundrede og 9 en'ere

____ _
2 en'ere og 7 hundrede

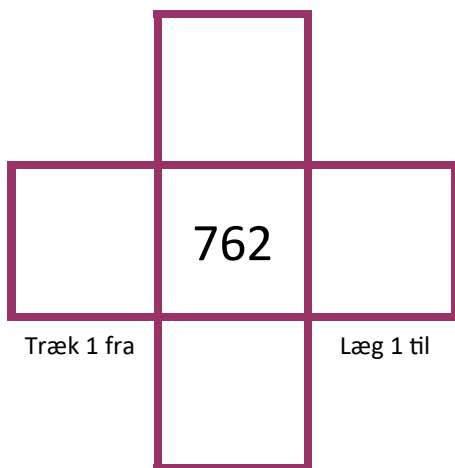
____ _
5 ti'ere, 7 en'er og 2 hundrede

____ _
8 en'ere, 4 ti'ere, 2 tusinder
og 1 hundrede

____ _
1 en'er, 6 hundrede
og 1 tusinder

____ _
2 tusinder, 3 ti'ere, 1 hundrede
og 2 en'ere

Læg 10 til

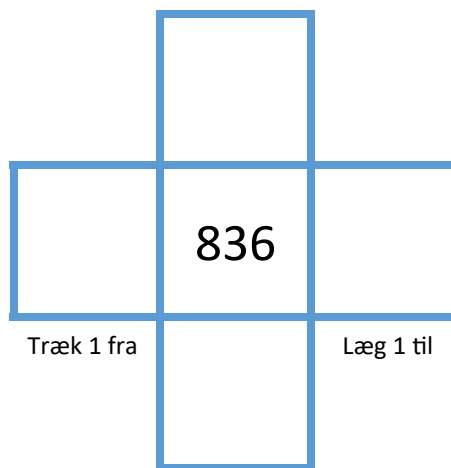


Træk 1 fra

Læg 1 til

Træk 10 fra

Læg 10 til



Træk 1 fra

Læg 1 til

Træk 10 fra