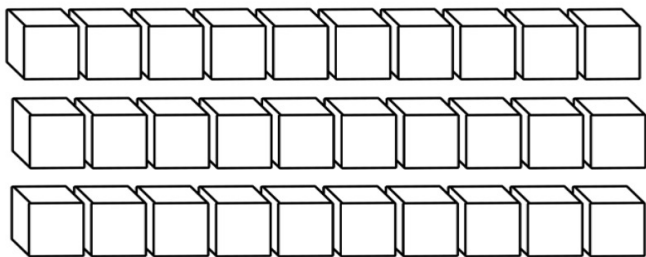
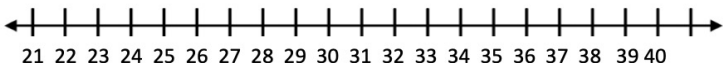
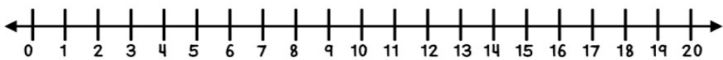


Navn _____



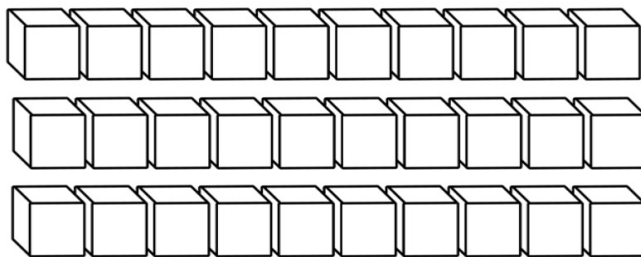
$$12 + 9 = \underline{\quad}$$



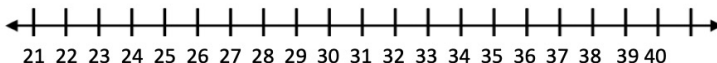
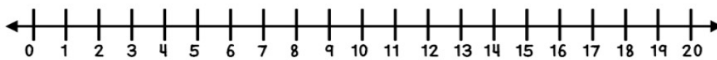
$$27 + 7 = \underline{\quad}$$

Jeg kan lægge
enkelt-cifrede tal til to-cifrede

Navn _____



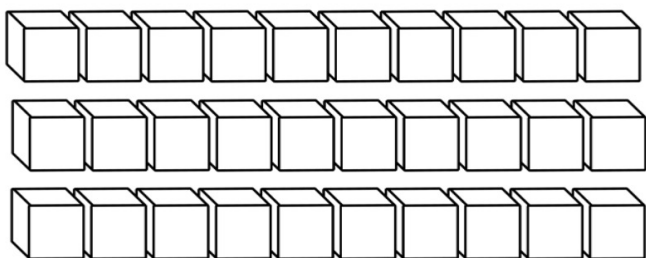
$$12 + 9 = \underline{\quad}$$



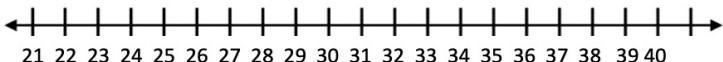
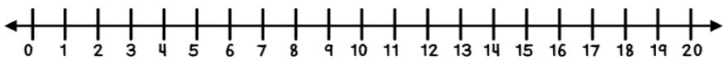
$$27 + 7 = \underline{\quad}$$

Jeg kan lægge
enkelt-cifrede tal til to-cifrede

Navn _____



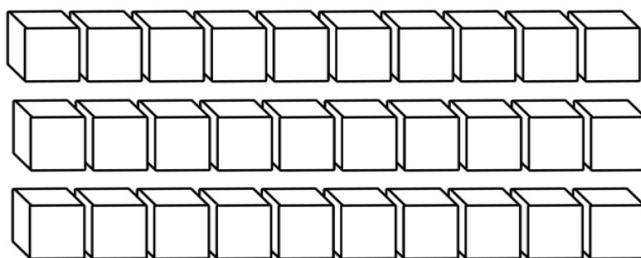
$$15 + 7 = \underline{\quad}$$



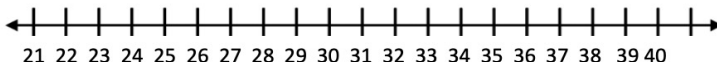
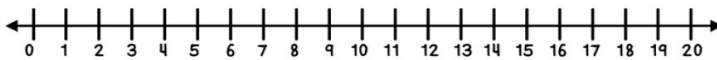
$$23 + 9 = \underline{\quad}$$

Jeg kan lægge
enkelt-cifrede tal til to-cifrede

Navn _____



$$15 + 7 = \underline{\quad}$$



$$23 + 9 = \underline{\quad}$$

Jeg kan lægge
enkelt-cifrede tal til to-cifrede

Navn _____

$9 + 4$



	→	
--	---	--

	←
--	---

Jeg kan tegne en plus
regnehistorie

Navn _____

$9 + 4$



	→	
--	---	--

	←
--	---

Jeg kan tegne en plus
regnehistorie

Navn _____

$8 + 7$



	→	
--	---	--

	←
--	---

Jeg kan tegne en plus
regnehistorie

Navn _____

$8 + 7$

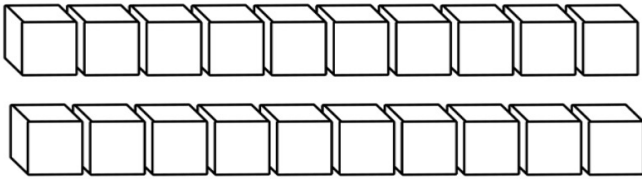


	→	
--	---	--

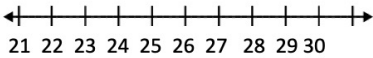
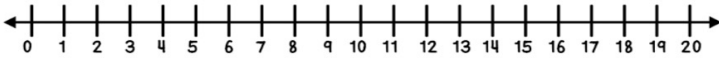
	←
--	---

Jeg kan tegne en plus
regnehistorie

Navn _____



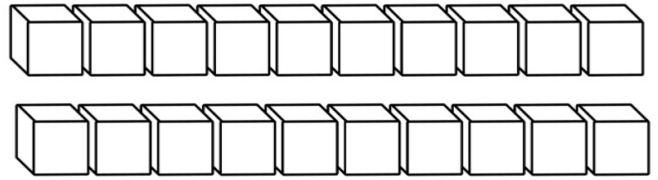
$$13 - 7 = \underline{\quad}$$



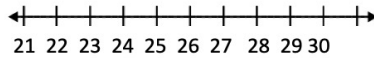
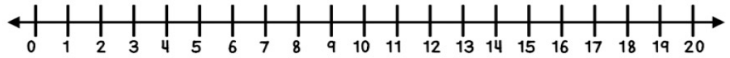
$$24 - 9 = \underline{\quad}$$

Jeg kan trække
enkelt-cifrede tal fra to-cifrede

Navn _____



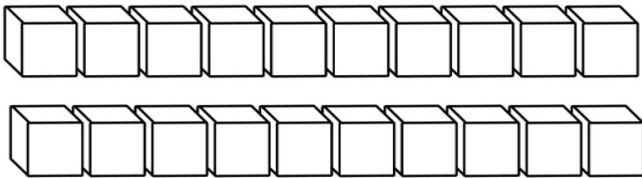
$$13 - 7 = \underline{\quad}$$



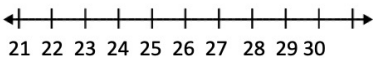
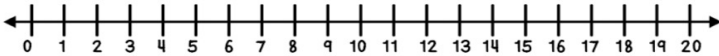
$$24 - 9 = \underline{\quad}$$

Jeg kan trække
enkelt-cifrede tal fra to-cifrede

Navn _____



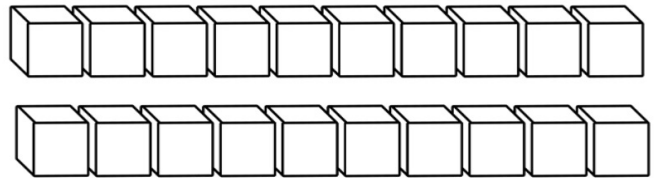
$$17 - 9 = \underline{\quad}$$



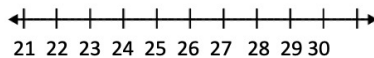
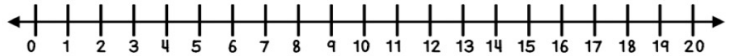
$$26 - 7 = \underline{\quad}$$

Jeg kan trække
enkelt-cifrede tal fra to-cifrede

Navn _____



$$17 - 9 = \underline{\quad}$$



$$26 - 7 = \underline{\quad}$$

Jeg kan trække
enkelt-cifrede tal fra to-cifrede

Navn _____

$13 - 5$



	→	
--	---	--

	↙
--	---

Jeg kan tegne en minus
regnehistorie

Navn _____

$13 - 5$



	→	
--	---	--

	↙
--	---

Jeg kan tegne en minus
regnehistorie

Navn _____

$11 - 6$



	→	
--	---	--

	↙
--	---

Jeg kan tegne en minus
regnehistorie

Navn _____

$11 - 6$



	→	
--	---	--

	↙
--	---

Jeg kan tegne en minus
regnehistorie

Tak:

Fordi du downloadede mit materiale



Terms of use:

Du må ikke videresælge/give materialet, eller redigere i det.

Du må gerne udskrive det i så mange eksemplarer du har lyst til, og dele bruge det i alle dine klasser år efter år.

*Venlig hilsen
Sarah Kirstein*

Credits:

