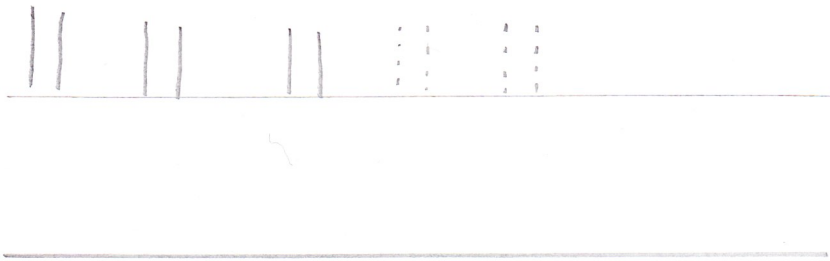


# Tallet 11


Skriv tallet




Tegn 11 ting:




Tallet før og efter



Find tallet 11



Farv 11 kaninhoveder



Hvor mange fandt du?

# Tallet 12

Find vej med 12

Start	12	13	14	19	21	15	12	12	12	16	22	21	32	3	12	12	12	14	15	16
12	12	19	52	12	12	12	12	18	12	15	25	20	7	24	12	11	12	11	25	24
12	21	13	24	12	11	6	14	17	12	14	50	12	12	12	12	10	12	12	27	13
12	4	15	12	12	9	5	12	12	12	22	0	12	6	21	29	9	13	12	12	18
12	12	6	12	13	4	2	12	16	100	56	60	12	5	19	69	8	22	55	12	12
8	12	12	12	32	3	1	12	12	12	12	12	12	13	18	72	27	33	66	42	12
17	22	13	19	45	7	8	21	23	44	21	46	18	11	12	81	26	44	33	19	Mai

Tallet før og efter

	12	
--	----	--

Tegn 12 ting:




Skriv tallet

12 12 12

# Tallet 13

Tegn 13 ting:



Regn med 13

$$13 + 2 = \underline{\hspace{2cm}}$$

$$\text{||||} \text{||||} \text{||} + \text{||} = \underline{\hspace{2cm}}$$

$$13 + 4 = \underline{\hspace{2cm}}$$

$$\text{||||} \text{||||} \text{||} + \text{||||} = \underline{\hspace{2cm}}$$


$$13 + 6 = \underline{\hspace{2cm}}$$

$$\text{||||} \text{||||} \text{||} + \text{||||} = \underline{\hspace{2cm}}$$

Skriv tallet

13 13 13 13

Farv 13 kaninhaler



Tallet 14




Skriv tallet

14 14 14 14

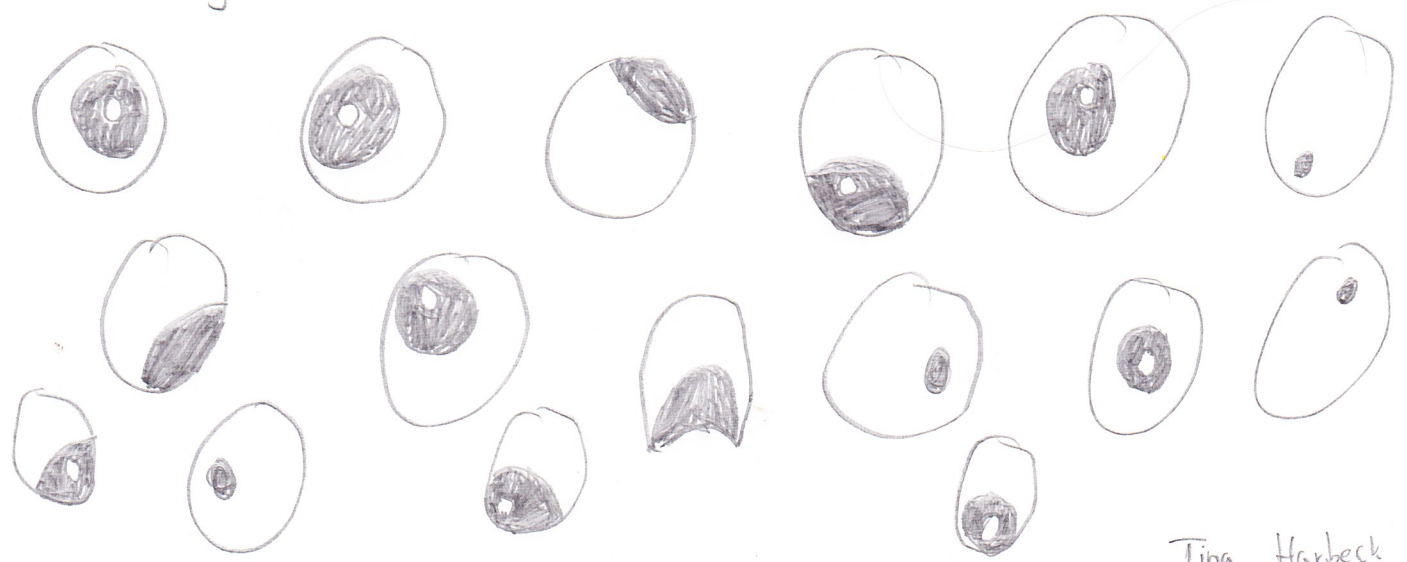
Find tallet 14

3	2	2	18	5	7	14	14	11
5	7	4	1	6	3	5	4	7
14	8	22	2	11	3	14	6	1
					8	14	21	9

Tegn 14 ting:




Farvelag 14 øjne



# Tallet 15

Tegn 15 ting



25    Set    Ring    om

15

19    18    20    14

24    2    13    22

11    10    26    3    12

21

9    8

4

7    16

23

5


17

15    6


Skriv tallet

15   15   15   15

Tallet før og efter



Farv



# Tallet 16

Find vej med 16

Start	16	16	22	46	19	21	48	96	16	16	16	16	16	16
32	17	16	21	18	20	32	47	11	16	32	19	17	18	16
18	21	16	19	16	16	16	16	44	16	22	16	16	16	16
2	19	16	13	16	81	46	16	33	16	11	16	14	13	14
6	5	16	100	16	99	16	16	62	16	42	16	15	11	9
7	9	16	16	16	69	16	24	42	16	30	16	16	16	16
33	44	33	45	8	36	16	25	33	16	40	8	7	6	16
19	46	56	82	1	42	16	16	16	16	50	13	12	11	Mai

Skriv tallet

16 16 16 16

Tegn 16 ting:



# Tallet 17

Find tallet 17

10	13	2	33	11	22	13	17	45	6	17	69	3	17		
18	10	11	17	23	10	16	19	8	9	18	19	6	9		
8	11	16	17	15	13	11	17	7	14	20	6	17	42	17	19

Skriv tallet

17 17 17 17

Før og efter


	17	
--	----	--

tegn 17 ting



Tallet 18

Tegn 18 ting



Skriver tallet

18 18 18 18

Tallet før og efter

	18	
--	----	--

Regn med 18

$$18 + 2 = \underline{\hspace{2cm}}$$

$$18 - 2 = \underline{\hspace{2cm}}$$

$$18 - 8 = \underline{\hspace{2cm}}$$

$$18 - 3 = \underline{\hspace{2cm}}$$

Tæl til 18

1, 2, 3, 4, 5, 6, 7, 8, 9, 10, 11, 12, 13, 14, 15, 16, 17, 18



Tallet 19

Skriv tallet


19 19 19 19

lo'er	ler

Før og efter

	19	
--	----	--

Tegn 19 ting



Tæl til 19

1, 2, 3, 4, 5, 6, 7, 8, 9, 10, 11, 12, 13, 14, 15  
16, 17, 18, 19